

Reading

الدرس التاسع Lesson 9

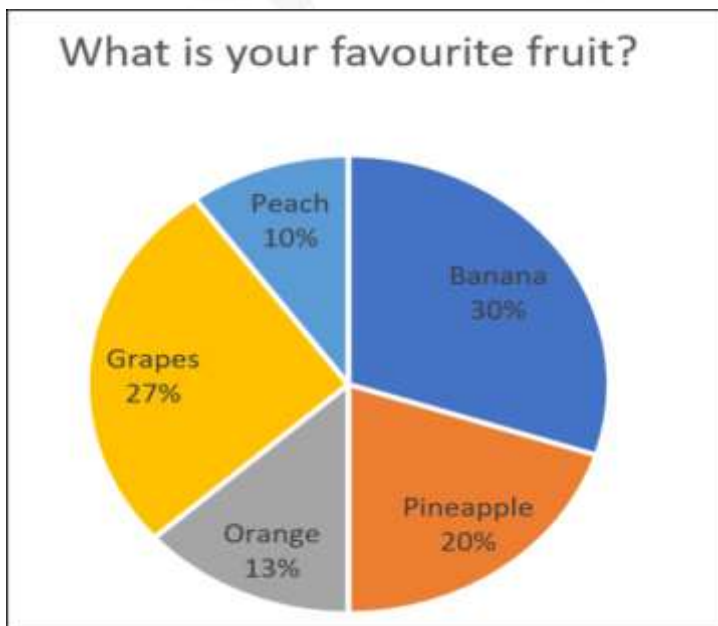
Lesson 9: Graphs الرسوم البيانية

الرسوم البيانية

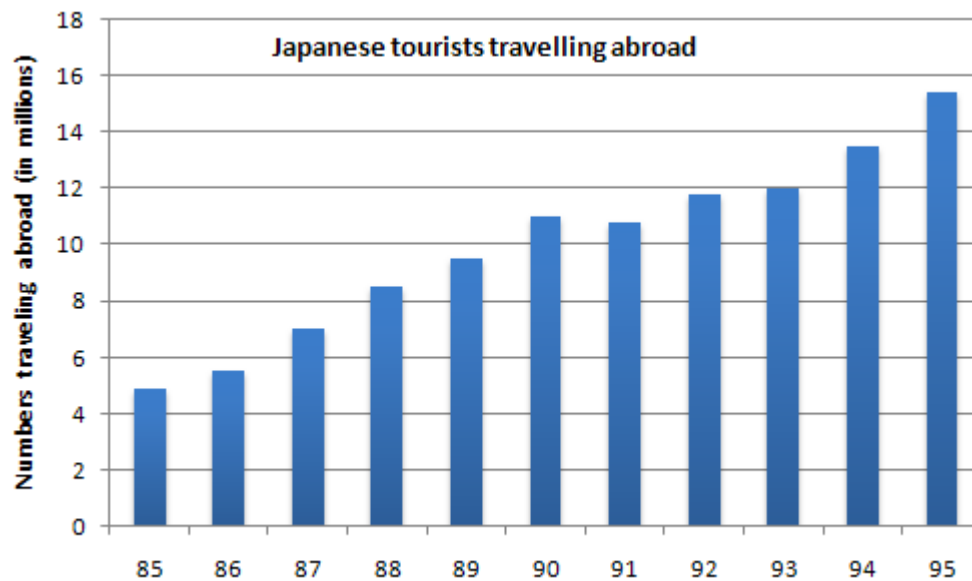
Graphs

Here, we will be talking about three types of graphs :

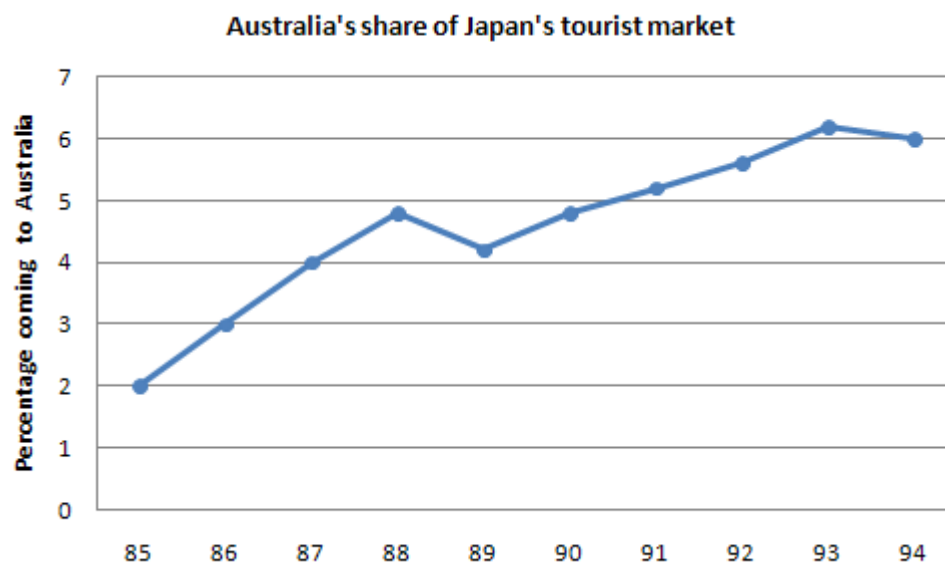
1. Pie Graphs /Pie Charts على شكل فطيرة



2. Bar Graphs على شكل أعمدة



3. Line Graphs على شكل خطوط



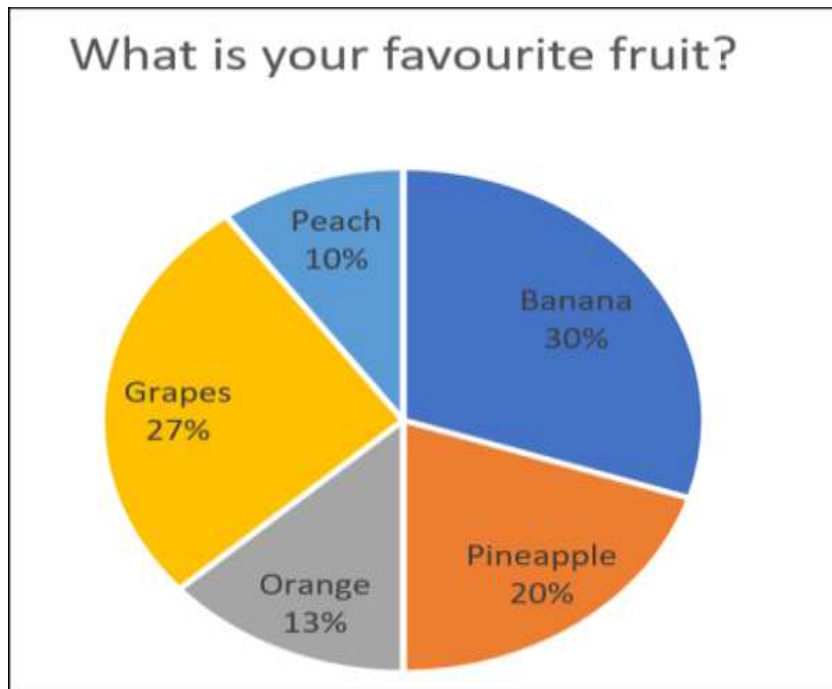
هذه تمارين على كل نوع من الأنواع الثلاثة

أنظر الإجابات في الأسفل

1. Pie Chart/ Pie Graph

Exercise 1

The pie chart below shows **the answers** of people to a question about their **favorite fruit**



- Which fruit was the most favorite to the people interviewed?
a. peach b. grapes c. banana d. pineapple
- Which fruit was the least favorite to the people interviewed?
a. peach b. grapes c. banana d. pineapple
- What was the percentage of people interviewed who preferred orange?
a. 27% b. 30% c. 10% d. 13%
- According to the chart, grapes were
a. the most favorite fruit b. the least favorite fruit
c. the second most favorite fruit d. not favorite fruit at all
- Which fruit had the highest percentage?
a. peach b. grapes c. pineapple d. banana

الحل

1. Which fruit was the most favorite to the people interviewed?

- a. peach b. grapes **c. banana** d. pineapple

2. Which fruit was the least favorite to the people interviewed?

- a. **peach** b. grapes c. banana d. pineapple

3. What was the percentage of people interviewed who preferred orange?

- a. 27% b. 30% c. 10% **d. 13%**

4. According to the chart, grapes were

- a. the most favorite fruit b. the least favorite fruit
c. the second most favorite fruit d. not favorite fruit at all

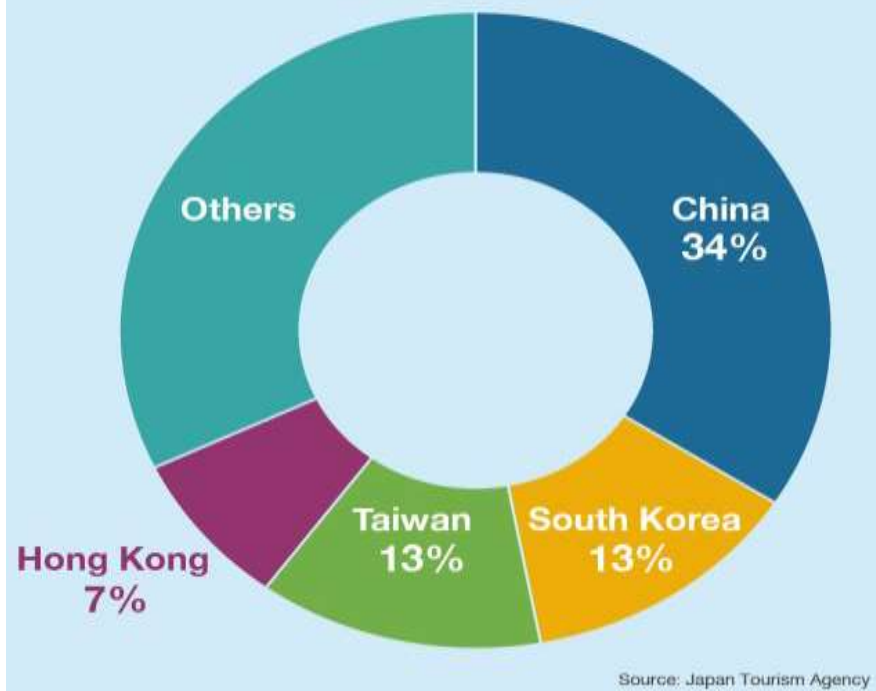
5. Which fruit had the highest percentage?

- a. peach b. grapes c. pineapple d. **banana**

Exercise 2

أنظر الإجابات في الأسفل

Countries that spend the most



1. Which country spends the most?

- a. China b. Taiwan c. South Korea d. Hong Kong

2. Which country spends the least?

- a. China b. Taiwan c. South Korea d. Hong Kong

3. Which countries spend the same percentage?

- a. China and Taiwan b. Taiwan and South Korea
c. Korea and Hong Kong d. China and Hong Kong

4. Which country spends 6% less than Taiwan?

- a. China b. Taiwan c. South Korea d. Hong Kong

5. The following two countries spend a total of 41%?

- a. China and Taiwan b. Taiwan and South Korea
c. Hong Kong and China d. China and South Korea

الحل

1. Which country spends the most?

- a. China** b. Taiwan c. South Korea d. Hong Kong

2. Which country spends the least?

- a. China b. Taiwan c. South Korea **d. Hong Kong**

3. Which countries spend the same percentage?

- a. China and Taiwan **b. Taiwan and South Korea**
 c. Korea and Hong Kong d. China and Hong Kong

4. Which country spends 6% less than Taiwan?

- a. China b. Taiwan c. South Korea **d. Hong Kong**

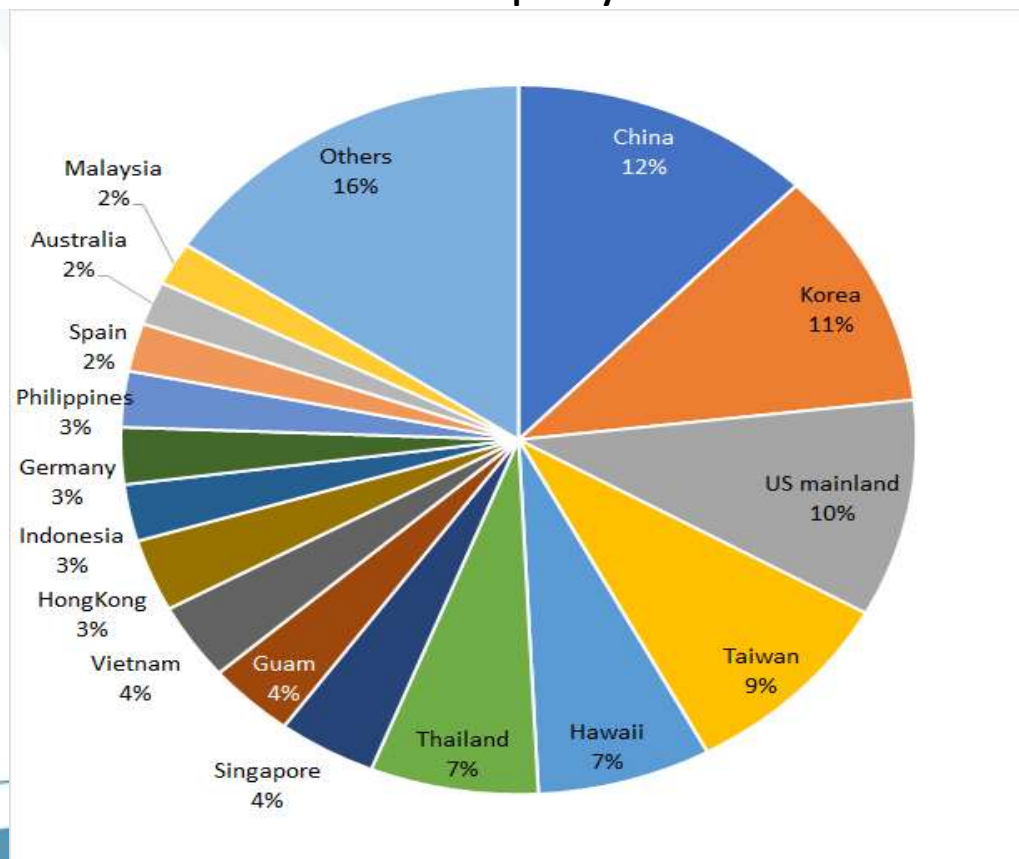
5. The following two countries spend a total of 41%?

- a. China and Taiwan b. Taiwan and South Korea
c. Hong Kong and China d. China and South Korea

Exercise 3

أنظر الإجابات في الأسفل

Number of Outbound Tourists from Japan by Destination in 2017



1. Which country / countries received the least percentage of Japanese tourists?

- a. Vietnam
- b. Spain, Malaysia and Australia
- c. Singapore
- d. Philippines, Germany and Indonesia

2. The following countries received 4% of the Japanese tourists.....

- a. Philippines, Germany and Indonesia
- b. Spain, Malaysia and Australia
- c. Vietnam, Singapore and Guam
- d. Korea, China and Hawaii

3. The total percentage of two countries was more than the percentage received by China. What were those two countries?

- a. Hong Kong and Vietnam
- b. Spain and Malaysia
- c. Taiwan and Malaysia
- d. Hawaii and Thailand

4. China received as many Japanese tourists as three countries in total. What are the three countries?

- a. Vietnam, Singapore and Guam
- b. Philippines, Germany and Indonesia
- c. d. Korea, US and Hawaii
- d. . Spain, Malaysia and Australia

الحل

1. Which country / countries received the least percentage of Japanese tourists?

- a. Vietnam
- b. Spain, Malaysia and Australia**
- c. Singapore
- d. Philippines, Germany and Indonesia

2. The following countries received 4% of the Japanese tourists.....

- a. Philippines, Germany and Indonesia
- b. Spain, Malaysia and Australia
- c. Vietnam, Singapore and Guam**
- d. Korea, China and Hawaii

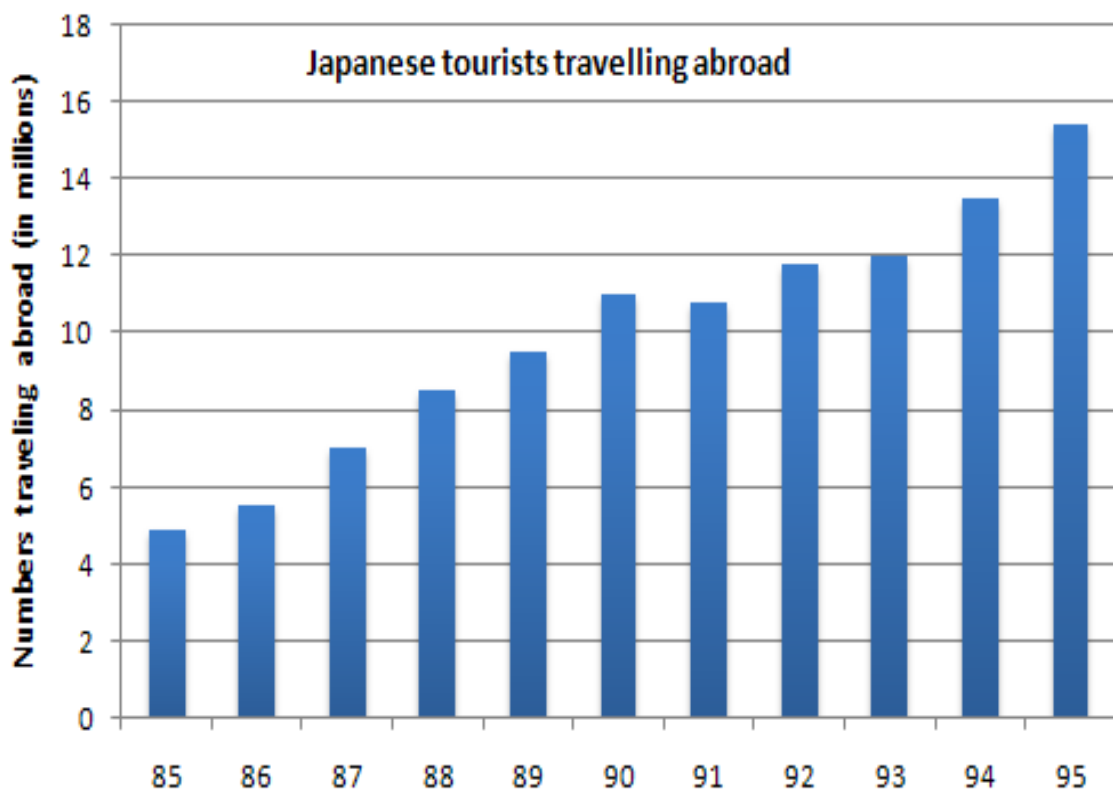
3. The total percentage of two countries was more than the percentage received by China. What were those two countries?

- a. Hong Kong and Vietnam
- b. Spain and Malaysia

- c. Taiwan and Malaysia **d. Hawaii and Thailand**

4. China received as many Japanese tourists as three countries in total. What are the three countries?

- a. Vietnam, Singapore and Guam**
 b. Philippines, Germany and Indonesia
 c. d. Korea, US and Hawaii
 d. . Spain, Malaysia and Australia



1. How many Japanese tourists travelled abroad in 1995?

- a. around 14 million b. around 16 million
 c. 12 million d. around 18 million

2. In which year was the number of Japanese tourists travelling abroad the least?

- a. 1985 b. 1986 c. 1988 d. 1992

3. In which year was the number of Japanese tourists travelling abroad 12 million tourists?

- a. 1992 b. 1991 c. 1993 d. 1995

4. Between 1993 and 1995, the number of Japanese tourists travelling abroad increased by around tourists

- a. 1 million b. 3 million c. 2 million d. 4 million

الحل

1. How many Japanese tourists travelled abroad in 1995?

- a. around 14 million **b. around 16 million**
c. 12 million d. around 18 million

2. In which year was the number of Japanese tourists travelling abroad the least?

- a. 1985** b. 1986 c. 1988 d. 1992

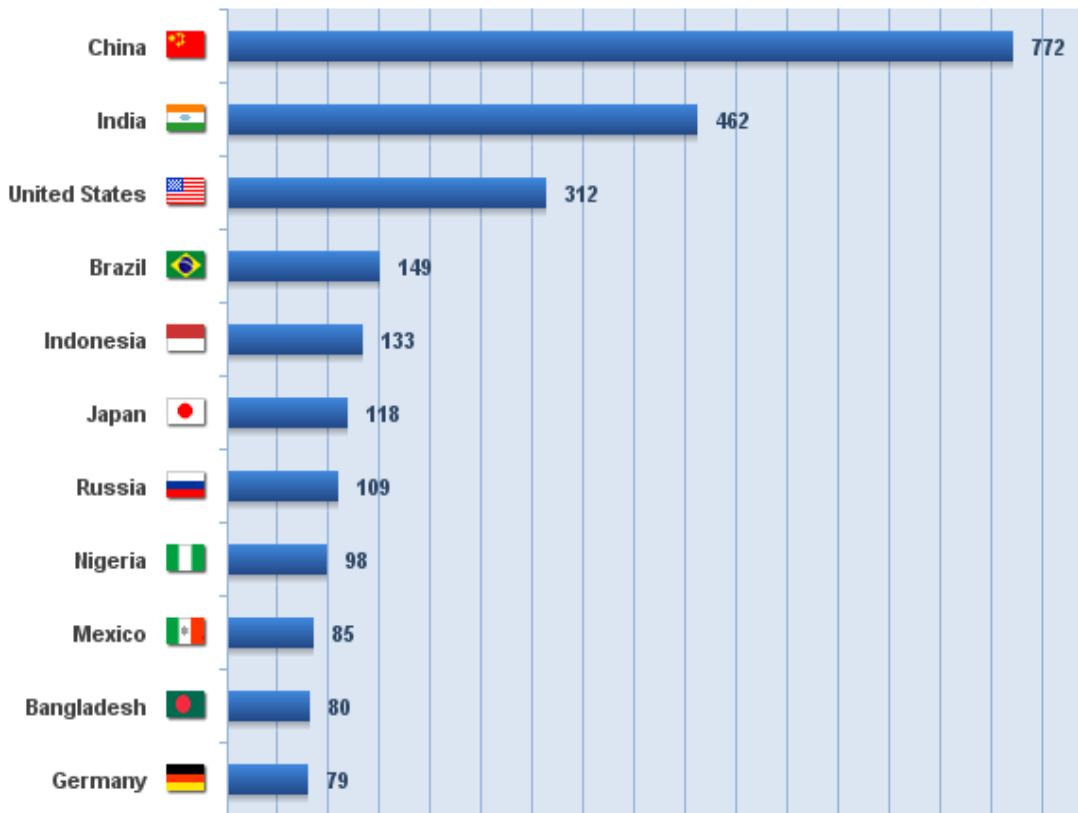
3. In which year was the number of Japanese tourists travelling abroad 12 million tourists?

- a. 1992 b. 1991 **c. 1993** d. 1995

4. Between 1993 and 1995, the number of Japanese tourists travelling abroad increased by around tourists

- a. 1 million b. 3 million c. 2 million **d. 4 million**

TOP 20 INTERNET COUNTRIES - 2018 With the Highest Number of Internet Users



Note: the numbers mentioned in the graph are in millions.

أنظر الإجابات في الأسفل

1. How many million people used the Internet in China in 2018?

- a. 312 million b. 462 million
c. 149 million d. 772 million

2. In which country was the number of the Internet users 109 million people in 2018?

- a. Indonesia b. Russia c. Mexico d. Brazil

3. India scored the.....number of the Internet users in 2018.

- a. highest b. second highest c. least d. biggest

4. In 2018, Japan scoredmore internet users than Russia.

- a. 9 million b. 10 million c. 109 million d. 118 million

الحل

1. How many million people used the Internet in China in 2018?

- a. 312 million b. 462 million

c. 149 million **d. 772 million**

2. In which country was the number of the Internet users 109 million people in 2018?

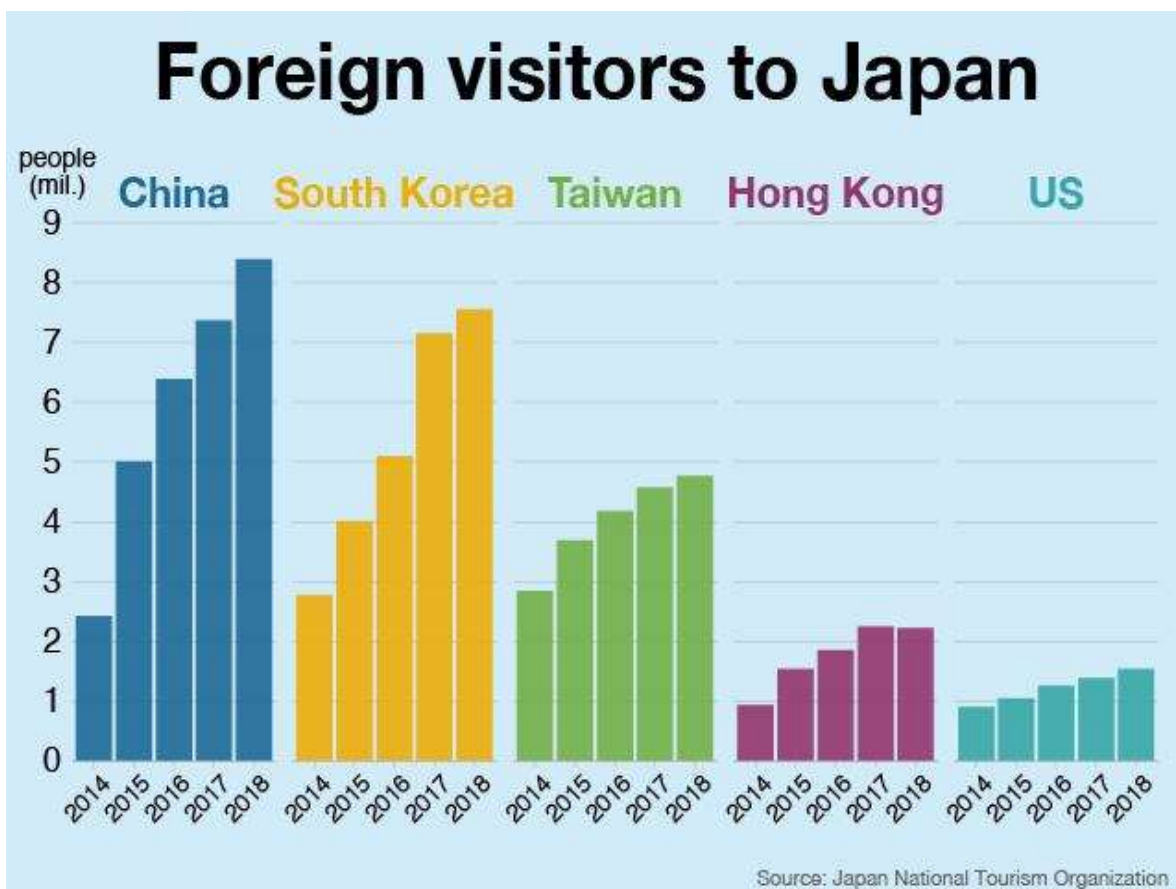
a. Indonesia **b. Russia** c. Mexico d. Brazil

3. India scored the.....number of the Internet users in 2018.

a. highest **b. second highest** c. least d. biggest

4. In 2018, Japan scoredmore internet users than Russia.

a. 9 million b. 10 million c. 109 million d. 118 million



أنظر الإجابات في الأسفل

1. How many million Koreans visited Japan in 2016?

a. 5 million b. 4 million
c. 7million d. 8 million

2. The highest number of visitors from China to Japan was in.....

a. 2014 b. 2017 c. 2018 d. 2015

3..... Americans visited Japan in 2018.

a. Less than 2 million b. Less than 1 million
c. More than 2 million c. Around 3 million

4. people from Taiwan visited Japan in 2014.

- a. Less than 2 million b. Less than 3 million
 c. More than 3 million d. more than 4 million

الحل

1. How many million Koreans visited Japan in 2016?

- a. 5 million b. 4 million
 c. 7million d. 8 million

2. The highest number of visitors from China to Japan was in.....

- a. 2014 b. 2017 c. 2018 c. 2015

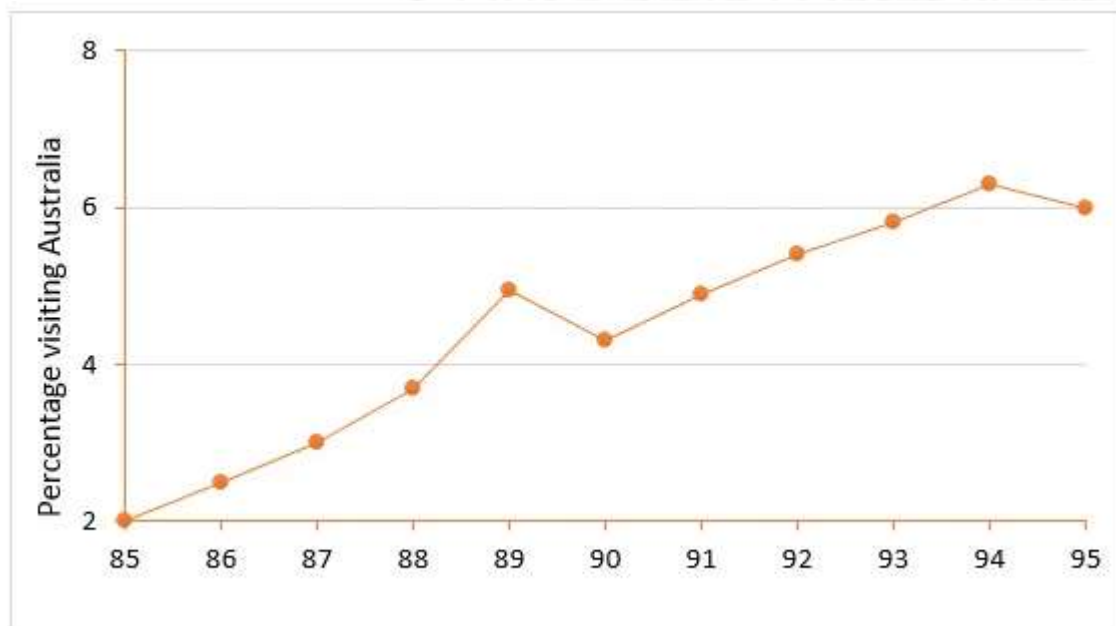
3..... Americans visited Japan in 2018.

- a. Less than 2 million b. Less than 1 million
 c. More than 2 million c. Around 3 million

4. people from Taiwan visited Japan in 2014.

- a. Less than 2 million b. Less than 3 million
 c. More than 3 million d. more than 4 million

Australia's share of Japan's tourist market



أنظر الإجابات في الأسفل

1. What was the percentage of the Australia's share of Japan's tourist market in 1995?

- a. 6 % b. 4 %
c. 8 % d. 2 %

2. What was the percentage of the Australia's share of Japan's tourist market in 1994?

- a. Exactly 6 % b. More than 6 %
c. more than 8% d. Less than 6 %

3. What was the percentage of the Australia's share of Japan's tourist market in 1989?

- a. Around 4 % b. More than 6 %
c. Around 5 % d. More than 7 %

4. The percentage of the Australia's share of Japan's tourist market..... between 1990 and 1994.

- a. drastically declined b. increased steadily
c. was the same d. decreased steadily

الحل

1. What was the percentage of the Australia's share of Japan's tourist market in 1995?

- a. 6 %** b. 4 %
c. 8 % d. 2 %

2. What was the percentage of the Australia's share of Japan's tourist market in 1994?

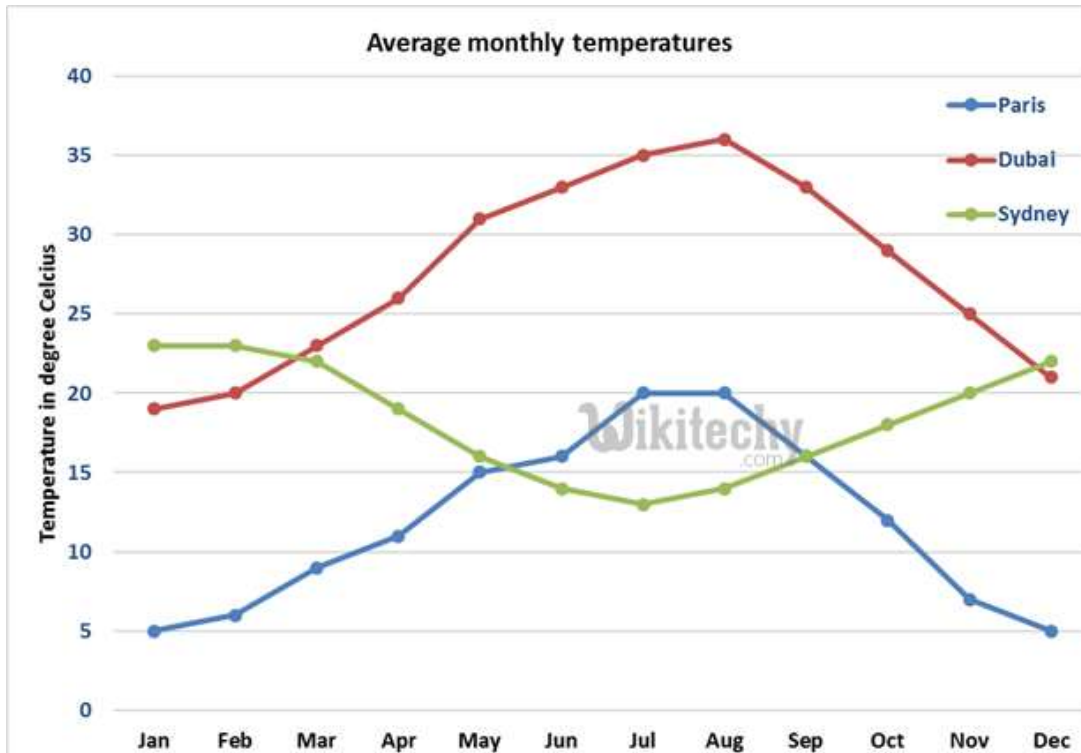
- a. Exactly 6 % **b. More than 6 %**
c. more than 8% d. Less than 6 %

3. What was the percentage of the Australia's share of Japan's tourist market in 1989?

- a. Around 4 % b. More than 6 %
c. Around 5 % d. More than 7 %

4. The percentage of the Australia's share of Japan's tourist market..... between 1990 and 1994.

- a. drastically declined **b. increased steadily**
c. was the same d. decreased steadily



أنظر الإجابات في الأسفل

1. The **red** line in the graph above represents the average monthly temperatures in.....

- a. Paris b. Dubai c. Sydney

2. The average temperature in Paris in December is.....

- a. 5 C⁰ b. 7 C⁰ c. 12 C⁰ d. 10 C⁰

3. Between May and August, the graph shows that the highest average monthly temperatures are in.....

- a. Paris b. Sydney c. Dubai

4. Which city has the lowest average temperature in July?

- a. Paris b. Dubai c. Sydney

الحل

1. The **red** line in the graph above represents the average monthly temperatures in.....

- a. Paris **b. Dubai** c. Sydney

2. The average temperature in Paris in December is.....

- a. 5 C⁰** b. 7 C⁰ c. 12 C⁰ d. 10 C⁰

3. Between May and August, the graph shows that the highest average monthly temperatures are in.....

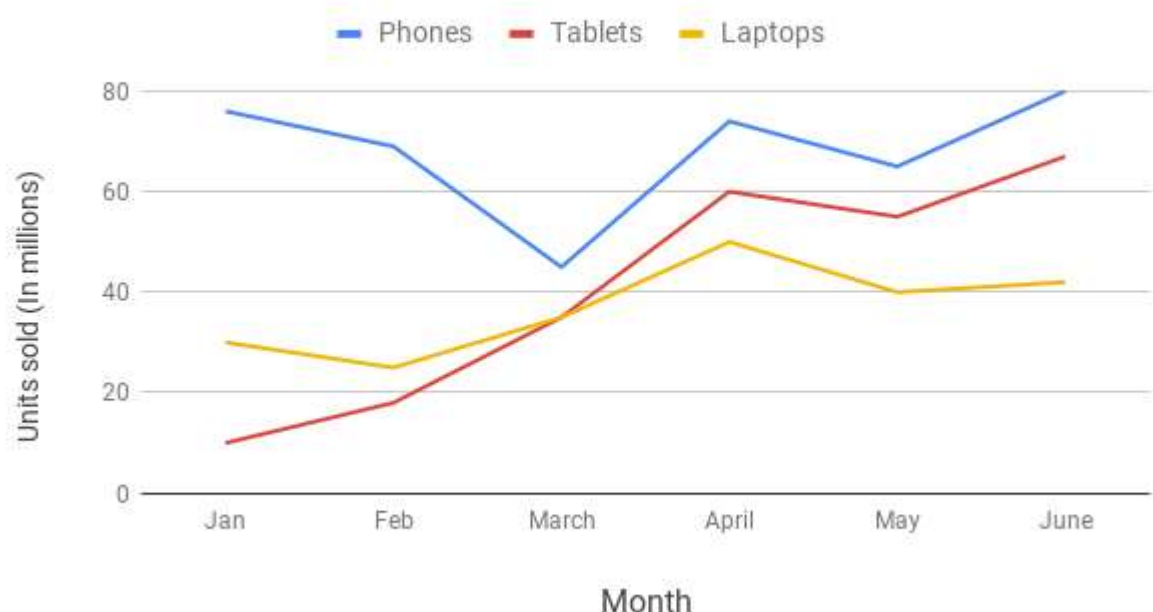
- a. Paris b. Sydney **c. Dubai**

4. Which city has the lowest average temperature in July?

- a. Paris b. Dubai **c. Sydney**



Device sales



أنظر الإجابات في الأسفل

1. Phones scored the highest sales in.....

- a. June b. January c. April d. March

2. 60 million tablets were sold in.....

- a. June b. January c. April d. February

3. The lowest sales of laptops were in.....

- a. March b. January c. April d. February

4. The highest sales of laptops were in.....

- a. May b. April c. Feb d. June

5. Which of the three devices scored the highest sales in January?

- a. Phones b. Tablets c. Laptops

الحل

1. Phones scored the highest sales in.....

- a. June** b. January c. April d. March

2. 60 million tablets were sold in.....

- a. June b. January **c. April** d. February

3. The lowest sales of laptops were in.....

- a. March b. January c. April **d. February**

4. The highest sales of laptops were in.....

- a. May **b. April** c. Feb d. June

5. Which of the three devices scored the highest sales in January?

- a. Phones** b. Tablets c. Laptops